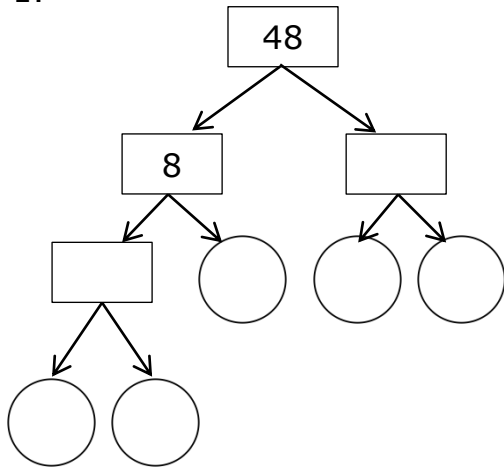


Name: _____ Date: _____

Prime Factorization - Factor Tree Method

Find the Prime Factors of the numbers.

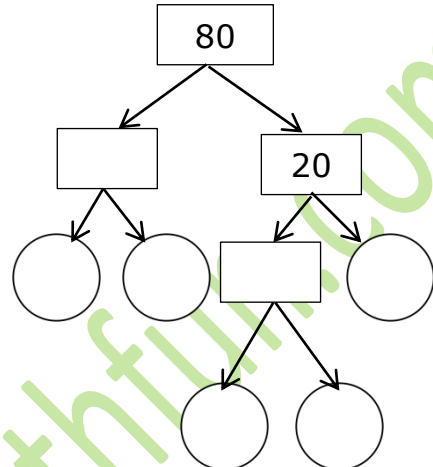
1.



Prime Factors

___ x ___ x ___ x ___ x ___ = 48

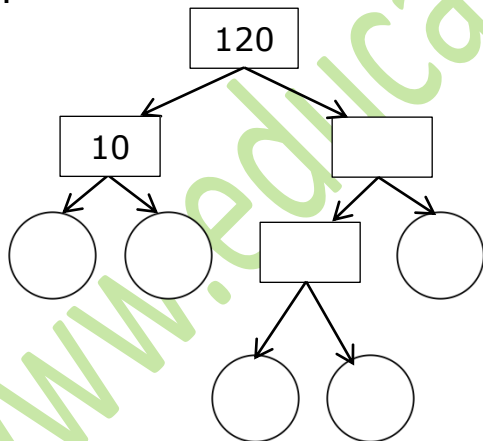
2.



Prime Factors

___ x ___ x ___ x ___ x ___ = 80

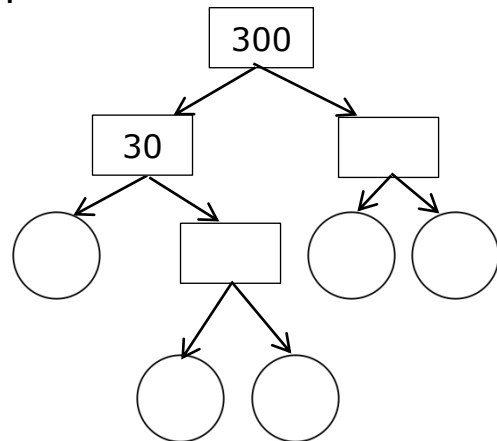
3.



Prime Factors

___ x ___ x ___ x ___ x ___ = 120

4.



Prime Factors

___ x ___ x ___ x ___ x ___ = 300