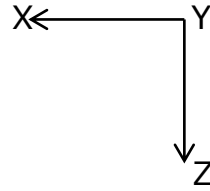
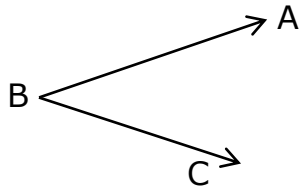


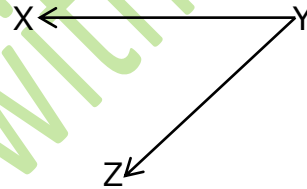
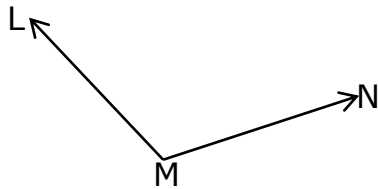
Name: \_\_\_\_\_ Date: \_\_\_\_\_

Basic of Angles

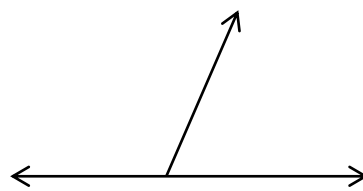
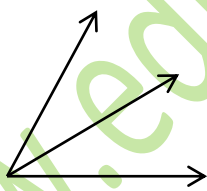
**Q1. Name the following angles in both ways.**



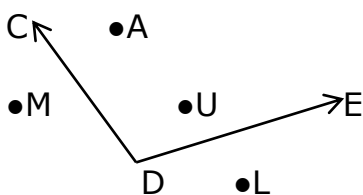
**Q2. Name the vertex and arms of each angle.**



**Q3. Count the number of angles formed in each figure.**



**Q4. Name all the points**



Interior points \_\_\_\_\_

Exterior points \_\_\_\_\_