

Name: \_\_\_\_\_ Date: \_\_\_\_\_

Time – Quarter Past and Quarter to

**Draw hour and minute hand in each of the following.**



**Quarter past 2**



**Quarter to 12**



**9:15**



**Quarter to 11**



**5:15**



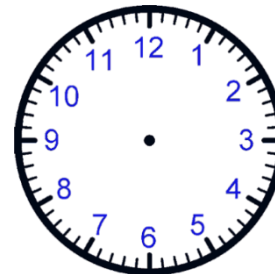
**Quarter past 6**



**7:15**



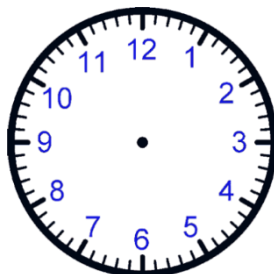
**6:45**



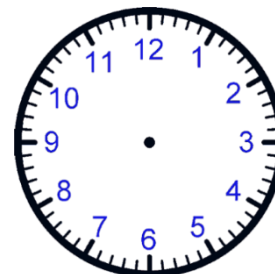
**Quarter to 5**



**Quarter to 2**



**3:15**



**10:45**