

Name: \_\_\_\_\_ Date: \_\_\_\_\_

Concept Of Fraction

**Q1 Write the fraction for shaded part.**

a.




\_\_\_\_\_

b.



\_\_\_\_\_

c.



\_\_\_\_\_

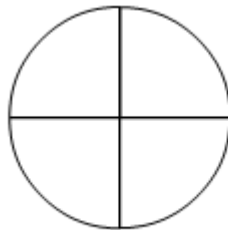
**Q2 Color the part each figure is representing.**

a.



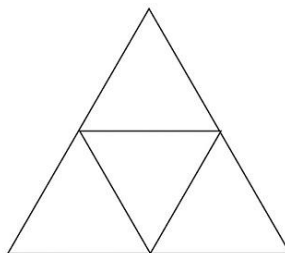
$\frac{1}{2}$

b.



$\frac{3}{4}$

c.



$\frac{1}{4}$