

Name: \_\_\_\_\_ Date: \_\_\_\_\_

Fraction on the Number Line

Q1. Draw number line and locate  $\frac{3}{7}$  on it.

Sol.

Q2. Draw number line and locate  $\frac{1}{5}$  on it.

Sol.

Q3. Draw number line and locate  $\frac{2}{3}$  on it.

Sol.

Q4. Draw number line and locate  $\frac{5}{3}$  on it.

Sol.

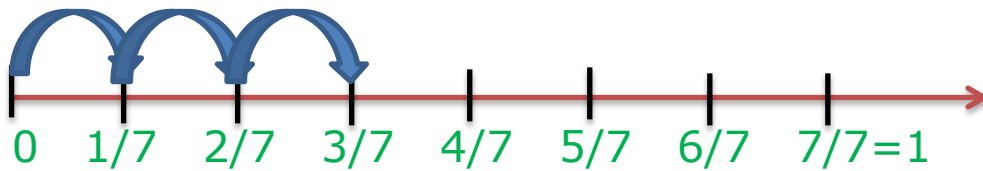
www.educationwithfun.com

## Answers

### Fraction on the Number Line

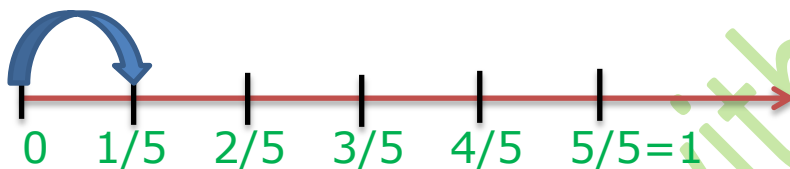
Q1. Draw number line and locate  $\frac{3}{7}$  on it.

Sol.



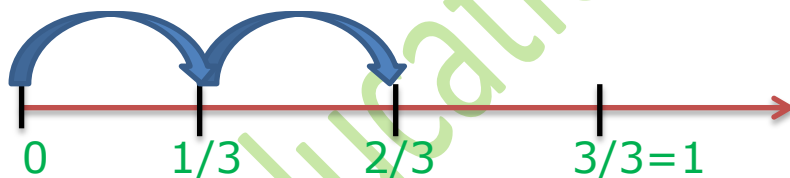
Q2. Draw number line and locate  $\frac{1}{5}$  on it.

Sol.



Q3. Draw number line and locate  $\frac{2}{3}$  on it.

Sol.



Q4. Draw number line and locate  $\frac{5}{3}$  on it.

Sol.

