

Name: _____ Date: _____

Maps

Q1. Draw different symbols used in a map.





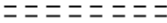
















Ans.

www.educationwithfun.com

Maps

Q1. Draw different symbols used in a map.

Ans

Railway Line : Broad gauge, Metre gauge, Railway station	 ,  , 
Roads : Metalled, Unmetalled	 , 
Boundary : International, State, District,	 ,  , 
River, Well, Tank, Canal, Bridge	 ,  ,  ,  , 
Temple, Church, Mosque, Chhatri	 ,  ,  , 
Post Office, Post & Telegraph Office, Police Station	PO , PTO , PS
Settlement, Graveyard	 
Trees, Grass	 

www.education